

Kendriya Vidyalaya Vijayapura

Class 4

Mathematics

Class Test

Chapter 1 bulding with bricks

Question:-1 See the following pictures carefully and write the names of shapes that you find in these objects? (3 M)

(a)



(b)



(c)



(d)



(e)



(f)



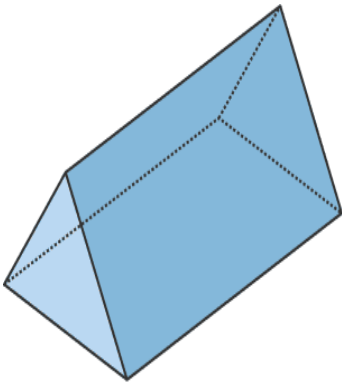
Question:-2 Write the number of faces, vertices and edges of the following shapes:- (9 M)

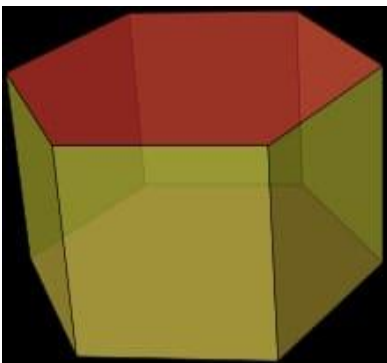
Answer :

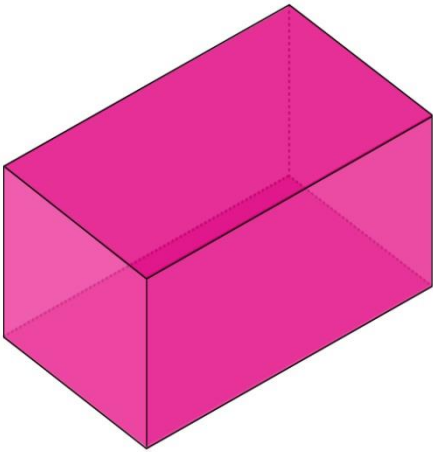
Faces

Vertices

Edges







Question:-3 If cost of 2000 bricks is Rs 4000.Find the cost of 1000 bricks? (2 M)

Question :- 4. If cost of 1000 bricks is Rs1000.Find the cost of 3000 bricks? (2 M)

Question :-5 Draw a wall pattern with jaali. (4 M)