

**KENDRIYA VIDYALAYA VIJAYAPURA**  
**MODEL QUESTION PAPER (2019-2020)**

**NAME:** \_\_\_\_\_

**CLASS:** 2 A / B

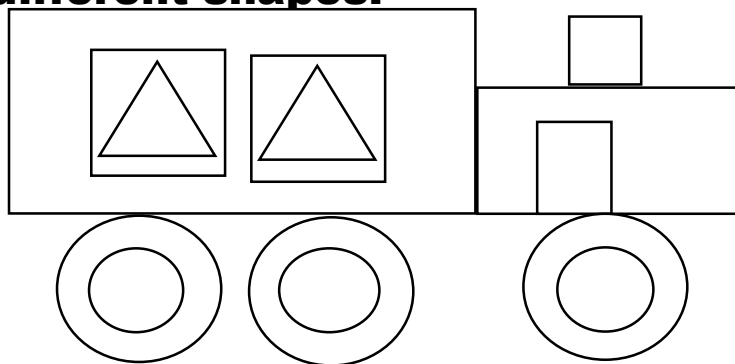
**ROLL NO. :** \_\_\_\_\_

**SUBJECT : MATHS**

Competencies	FN	UBC	AC	PSA
Grades				

**FORMATION OF NUMBERS**

**Q1. Look at picture carefully and count the number of the different shapes.**



**1. How many triangles are there?**

**Ans:** \_\_\_\_\_

**2. How many rectangles are there?**

**Ans:** \_\_\_\_\_

**3. How many total shapes there all together?**

**Ans:** \_\_\_\_\_


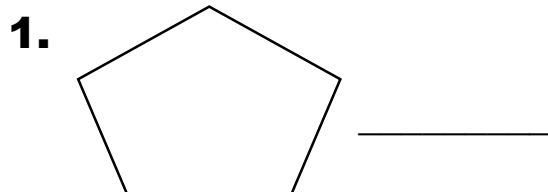
**Q2. Complete the following number pattern.**

**1.** 25   35   45   \_\_\_\_\_

**2.** 1   2   3   \_\_\_\_\_

**UNDERSTANDING THE BASIC CONCEPT**

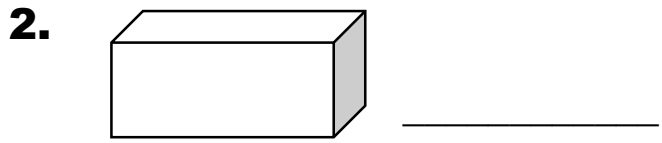

**Q3. Name the different types of shapes.**



**Q4. Make your own colour pattern.**










--	--	--	--	--	--	--

**Q5. Identify the shape of the given picture.**




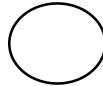

**ABILITY TO COMPUTE**

**Q6. Complete the following pattern.**

<b>ABC</b>	<b>BCD</b>	<b>CDE</b>			
<b>1A</b>	<b>2B</b>	<b>3C</b>			
					
					
					

**PROBLEM SOLVING ABILITY**

**Q7. Fill in the boxes with the proper answer.**

<b>SI. NO.</b>	<b>SHAPES</b>	<b>NO. OF EDGES</b>	<b>NO. OF CORNERS.</b>
<b>1.</b>	 <b>SQUARE</b>		
<b>2.</b>	 <b>CIRCLE</b>		
<b>3.</b>	 <b>TRIANGLE</b>		

**Q8. Draw the half mirror image of the following.**